



Determine which letter best represents the sum.

1) $\frac{1}{10} + \frac{2}{10}$

2) $\frac{4}{12} + \frac{2}{12}$

3) $\frac{3}{4} + \frac{2}{4}$

4) $\frac{2}{6} + \frac{1}{6}$

5) $\frac{1}{12} + \frac{7}{12}$

6) $\frac{6}{8} + \frac{5}{8}$

7) $\frac{5}{12} + \frac{11}{12}$

8) $\frac{2}{5} + \frac{3}{5}$

9) $\frac{6}{10} + \frac{7}{10}$

10) $\frac{1}{3} + \frac{1}{3}$

11) $\frac{7}{12} + \frac{7}{12}$

12) $\frac{3}{8} + \frac{3}{8}$

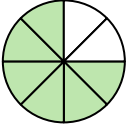
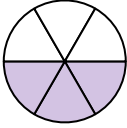
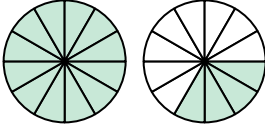
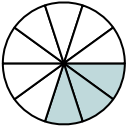
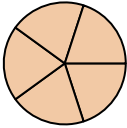
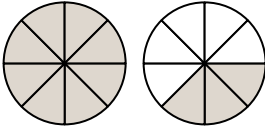
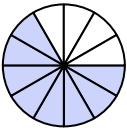
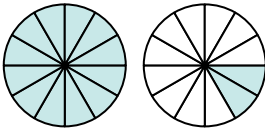
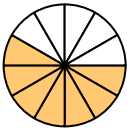
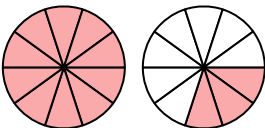
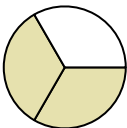
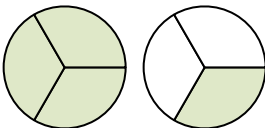
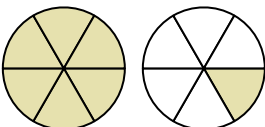
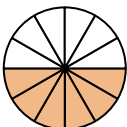
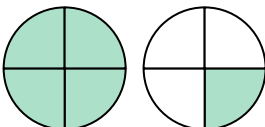
13) $\frac{4}{6} + \frac{3}{6}$

14) $\frac{5}{12} + \frac{2}{12}$

15) $\frac{2}{3} + \frac{2}{3}$

Answers

1. _____
2. _____
3. _____
4. _____
5. _____
6. _____
7. _____
8. _____
9. _____
10. _____
11. _____
12. _____
13. _____
14. _____
15. _____

A. 	B. 	C. 
D. 	E. 	F. 
G. 	H. 	I. 
J. 	K. 	L. 
M. 	N. 	O. 



Determine which letter best represents the sum.

1) $\frac{1}{10} + \frac{2}{10}$

2) $\frac{4}{12} + \frac{2}{12}$

3) $\frac{3}{4} + \frac{2}{4}$

4) $\frac{2}{6} + \frac{1}{6}$

5) $\frac{1}{12} + \frac{7}{12}$

6) $\frac{6}{8} + \frac{5}{8}$

7) $\frac{5}{12} + \frac{11}{12}$

8) $\frac{2}{5} + \frac{3}{5}$

9) $\frac{6}{10} + \frac{7}{10}$

10) $\frac{1}{3} + \frac{1}{3}$

11) $\frac{7}{12} + \frac{7}{12}$

12) $\frac{3}{8} + \frac{3}{8}$

13) $\frac{4}{6} + \frac{3}{6}$

14) $\frac{5}{12} + \frac{2}{12}$

15) $\frac{2}{3} + \frac{2}{3}$

Answers

1. **D** $\frac{3}{10}$

2. **N** $\frac{6}{12}$

3. **O** $1\frac{1}{4}$

4. **B** $\frac{3}{6}$

5. **G** $\frac{8}{12}$

6. **F** $1\frac{3}{8}$

7. **C** $1\frac{4}{12}$

8. **E** $\frac{5}{5}$

9. **J** $1\frac{3}{10}$

10. **K** $\frac{2}{3}$

11. **H** $1\frac{2}{12}$

12. **A** $\frac{6}{8}$

13. **M** $1\frac{1}{6}$

14. **I** $\frac{7}{12}$

15. **L** $1\frac{1}{3}$

A.	B.	C.
D.	E.	F.
G.	H.	I.
J.	K.	L.
M.	N.	O.